













تست هوش جهش تحصیلی

1- پاسخ صحیح را پیدا کنید.

The image shows a 4x4 grid of icons and mathematical symbols on a light blue background. The icons are: a green Christmas tree, a brown reindeer, and a red and white striped candy cane. The mathematical symbols are: plus (+), multiplication (x), and equals (=). The grid is as follows:

	+		+		=	9
	+		+		=	17
	+		+		=	23
	+		x		=	?

2- پاسخ صحیح را پیدا کنید.

